



# INDIAN SCHOOL AL WADI AL KABIR

DEPARTMENT OF MATHEMATICS (2025 – 2026)

TOPIC: SUBTRACTION


MIXED OPERATION WORKSHEET

RESOURCE PERSON: Mrs. Savitha D'Souza


NAME: \_\_\_\_\_ CLASS: II SEC: \_\_\_\_\_ DATE: \_\_\_\_\_

**Read the word problems and identify whether they are addition or subtraction problems. Insert the appropriate sign in the given box.**


1. Ella bought a box of 30 coloured markers. She gave 8 markers to her sister. How many markers does Ella have now?




2. Anna had 34 marbles and Abhay had 55. How many marbles did they have in total?




3. Leena went to the grocery store. She bought 12 packs of cookies and 16 packs of noodles. How many packs of groceries did she buy in all?




4. There were 36 leaves on a plant. 13 leaves dried and fell off. How many leaves are left on the plant?




5. 29 birds were sitting on a big banyan tree. There was a loud sound and 15 birds flew away. How many birds were left on the tree?



6. A monkey eats 9 bananas for breakfast and 18 bananas for lunch. How many bananas did the monkey eat altogether?



7. Class III C had 56 students. 49 students passed and were promoted to the next class. How many students did not get promoted?





# INDIAN SCHOOL AL WADI AL KABIR

DEPARTMENT OF MATHEMATICS (2025 – 2026)

TOPIC: SUBTRACTION

MIXED OPERATION WORKSHEET


RESOURCE PERSON: Mrs. Savitha D'Souza

Answer key


NAME: \_\_\_\_\_ CLASS: II SEC: \_\_\_\_\_ DATE: \_\_\_\_\_

Read the word problems and identify whether they are addition or subtraction problems. Insert the appropriate sign in the given box.


1. Ella bought a box of 30 coloured markers. She gave 8 markers to her sister. How many markers does Ella have now?




2. Anna had 34 marbles and Abhay had 55. How many marbles did they have in total?




3. Leena went to the grocery store. She bought 12 packs of cookies and 16 packs of noodles. How many packs of groceries did she buy in all?




4. There were 36 leaves on a plant. 13 leaves dried and fell off. How many leaves are left on the plant?



5. 29 birds were sitting on a big banyan tree. There was a loud sound and 15 birds flew away. How many birds were left on the tree?



6. A monkey eats 9 bananas for breakfast and 18 bananas for lunch. How many bananas did the monkey eat altogether?



7. Class III C had 56 students. 49 students passed and were promoted to the next class. How many students did not get promoted?

